

	I HAVE 12.
	Who has $\frac{1}{2}$ of 14 ?


Mary Alice Hatchett ★7/2009

	I HAVE 7.
	Who has $\frac{2}{3}$ of 33?


Mary Alice Hatchett ★7/2009

	I HAVE 22 .
	Who has $\frac{1}{4}$ of 332 ?


Mary Alice Hatchett ★7/2009

	I HAVE 83.
	Who has $\frac{4}{5}$ of 25?


Mary Alice Hatchett ★7/2009

	I HAVE 20 .
	Who has $\frac{1}{2}$ of 52 ?


Mary Alice Hatchett ★7/2009

	I HAVE 26.
	Who has $\frac{2}{3}$ of 15?


Mary Alice Hatchett ★7/2009

	I HAVE 10 .
	Who has $\frac{2}{3}$ of 102 ?


Mary Alice Hatchett ★7/2009

	I HAVE 68.
	Who has $\frac{3}{4}$ of 20?


Mary Alice Hatchett ★7/2009

	I HAVE 15 .
	Who has $\frac{6}{7}$ of 49 ?


Mary Alice Hatchett ★7/2009

	I HAVE 42.
	Who has $\frac{1}{5}$ of 460?


Mary Alice Hatchett ★7/2009

	I HAVE 92 .
	Who has $\frac{2}{3}$ of 60 ?


Mary Alice Hatchett ★7/2009

	I HAVE 40.
	Who has $\frac{3}{4}$ of 36?


Mary Alice Hatchett ★7/2009

	I HAVE 27 .
	Who has $\frac{2}{3}$ of 12 ?


Mary Alice Hatchett ★7/2009

	I HAVE 8.
	Who has $\frac{4}{5}$ of 40?


Mary Alice Hatchett ★7/2009

	I HAVE 32 .
	Who has $\frac{5}{6}$ of 78 ?


Mary Alice Hatchett ★7/2009

	I HAVE 65.
	Who has $\frac{2}{3}$ of 21?


Mary Alice Hatchett ★7/2009

	I HAVE 14 .
	Who has $\frac{1}{5}$ of 55 ?


Mary Alice Hatchett ★7/2009

	I HAVE 11.
	Who has $\frac{3}{8}$ of 24?


Mary Alice Hatchett ★7/2009

	I HAVE 9 .
	Who has $\frac{4}{5}$ of 30 ?


Mary Alice Hatchett ★7/2009

	I HAVE 24.
	Who has $\frac{7}{8}$ of 40?


Mary Alice Hatchett ★7/2009

	I HAVE 35 .
	Who has $\frac{1}{5}$ of 25 ?


Mary Alice Hatchett ★7/2009

	I HAVE 5.
	Who has $\frac{5}{6}$ of 30?


Mary Alice Hatchett ★7/2009

	I HAVE 25 .
	Who has $\frac{6}{7}$ of 56 ?


Mary Alice Hatchett ★7/2009

	I HAVE 48.
	Who has $\frac{1}{5}$ of 15?


Mary Alice Hatchett ★7/2009

	I HAVE 3 .
	Who has $\frac{3}{7}$ of 49 ?


Mary Alice Hatchett ★7/2009

	I HAVE 21.
	Who has $\frac{1}{3}$ of 39?


Mary Alice Hatchett ★7/2009

	I HAVE 13 .
	Who has $\frac{5}{6}$ of 36 ?


Mary Alice Hatchett ★7/2009

	I HAVE 30.
	Who has $\frac{3}{8}$ of 48?

Mary Alice Hatchett ★7/2009

	I HAVE 18 .
	Who has $\frac{4}{5}$ of 35 ?

Mary Alice Hatchett ★7/2009

	I HAVE 28.
	Who has $\frac{2}{7}$ of 42?

Mary Alice Hatchett ★7/2009

1	2	3	4	5	6	7	8	9	10
11	12	13	14	15	16	17	18	19	20
21	22	23	24	25	26	27	28	29	30
31	32	33	34	35	36	37	38	39	40
41	42	43	44	45	46	47	48	49	50
51	52	53	54	55	56	57	58	59	60
61	62	63	64	65	66	67	68	69	70
71	72	73	74	75	76	77	78	79	80
81	82	83	84	85	86	87	88	89	90
91	92	93	94	95	96	97	98	99	100

NAME: _____ DATE: _____

'X' out each number that matches your classmates' answers.

Choose 8 numbers from the hundred chart that you did NOT mark out.

Number is divisible by:	2	3	4	5	6	7	8	9
Write your number.								

1	2	3	4	5	6	7	8	9	10
11	12	13	14	15	16	17	18	19	20
21	22	23	24	25	26	27	28	29	30
31	32	33	34	35	36	37	38	39	40
41	42	43	44	45	46	47	48	49	50
51	52	53	54	55	56	57	58	59	60
61	62	63	64	65	66	67	68	69	70
71	72	73	74	75	76	77	78	79	80
81	82	83	84	85	86	87	88	89	90
91	92	93	94	95	96	97	98	99	100

NAME: _____ DATE: _____

'X' out each number that matches your classmates' answers.

Choose 8 numbers from the hundred chart that you did NOT mark out.

Number is divisible by:	2	3	4	5	6	7	8	9
Write your number.								